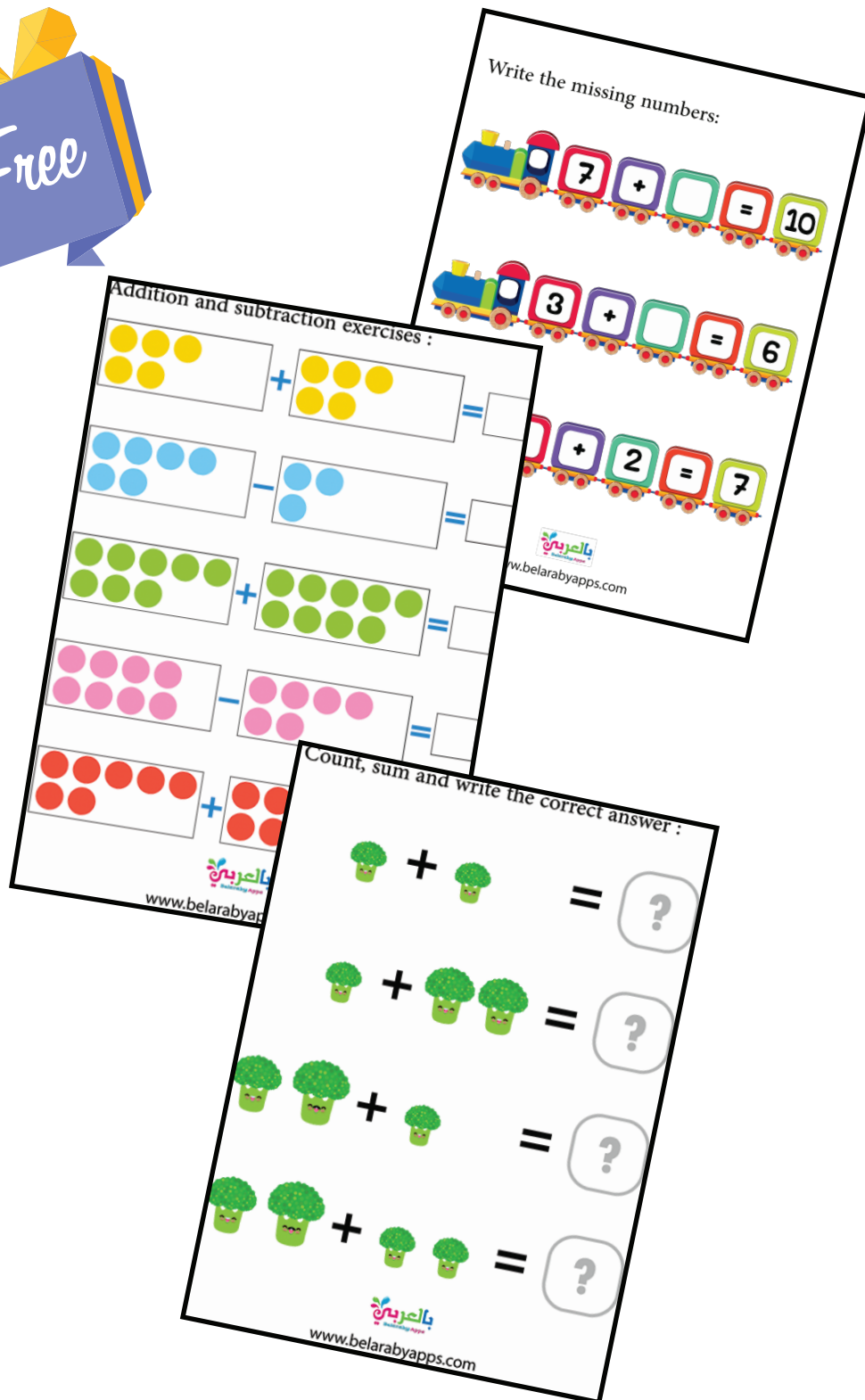


Free Addition and Subtraction Mixed Worksheets



Count, sum and write the correct answer :

$$1 + 1 = ?$$

$$1 + 2 = ?$$

$$2 + 1 = ?$$

$$2 + 2 = ?$$

Count the pens and subtract :

$$3 - 2 = \boxed{?}$$

$$3 - 1 = \boxed{?}$$

$$4 - 1 = \boxed{?}$$

$$3 - 3 = \boxed{?}$$

Addition and subtraction exercises :

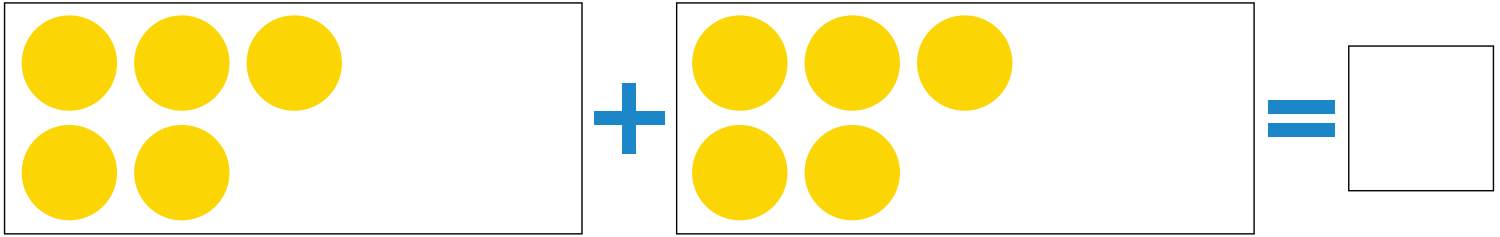
$$1 + 1 = \square$$

$$3 + 2 = \square$$

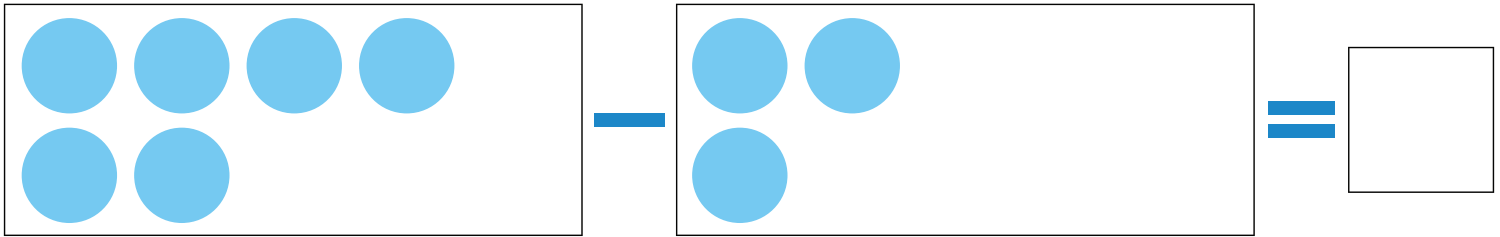
$$4 - 1 = \square$$

$$4 - 2 = \square$$


Addition and subtraction exercises :



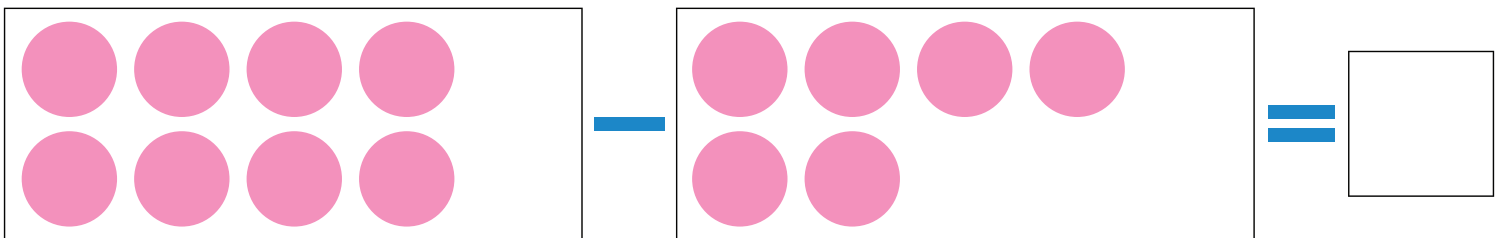
5 yellow circles + 5 yellow circles =



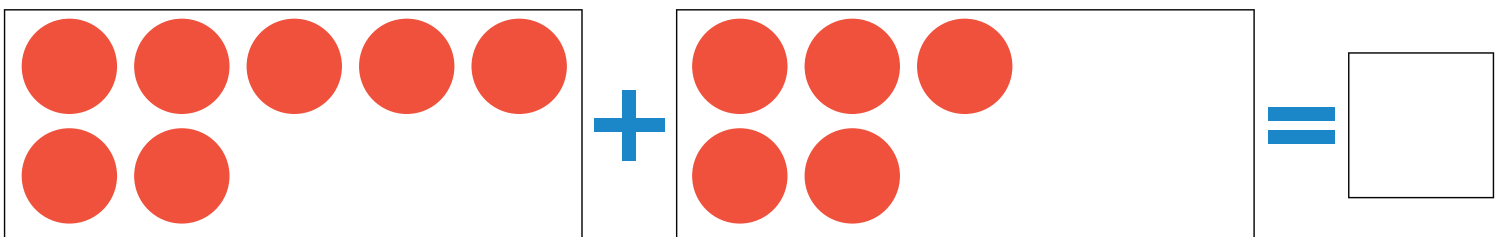
6 blue circles - 3 blue circles =



8 green circles + 7 green circles =



8 pink circles - 4 pink circles =



7 red circles + 5 red circles =

Addition and subtraction exercises :

$$\begin{array}{|c|} \hline \text{5 bunches of grapes} \\ \hline \end{array} + \begin{array}{|c|} \hline \text{3 bunches of grapes} \\ \hline \end{array} = \begin{array}{|c|} \hline \\ \hline \end{array}$$


$$\begin{array}{|c|} \hline \text{4 bunches of grapes} \\ \hline \end{array} + \begin{array}{|c|} \hline \text{1 bunch of grapes} \\ \hline \end{array} = \begin{array}{|c|} \hline \\ \hline \end{array}$$

$$\begin{array}{|c|} \hline \text{8 bunches of grapes} \\ \hline \end{array} - \begin{array}{|c|} \hline \text{6 bunches of grapes} \\ \hline \end{array} = \begin{array}{|c|} \hline \\ \hline \end{array}$$


$$\begin{array}{|c|} \hline \text{10 bunches of grapes} \\ \hline \end{array} - \begin{array}{|c|} \hline \text{7 bunches of grapes} \\ \hline \end{array} = \begin{array}{|c|} \hline \\ \hline \end{array}$$

$$\begin{array}{|c|} \hline \text{8 bunches of grapes} \\ \hline \end{array} + \begin{array}{|c|} \hline \text{2 bunches of grapes} \\ \hline \end{array} = \begin{array}{|c|} \hline \\ \hline \end{array}$$

Practice Subtracting Math :




$$4 - 1 = 3$$




$$4 - 2 = ?$$




$$5 - 3 = ?$$



$$5 - 1 = ?$$






$$5 - 2 = ?$$



$$3 - 2 = ?$$

Write the missing numbers:




Addition and subtraction exercises :

$$9 - 4 = \square$$


$$6 - 7 = \square$$

$$5 + 8 = \square$$


Practice Subtracting Math :



$$4 - 1 = 3$$



$$3 - 1 = 2$$




$$4 - 2 = 2$$



$$5 - 2 = 3$$





$$5 - 3 = 2$$



$$6 - 3 = 3$$



Addition and subtraction exercises :

1.





$$(?) + (?) = (?)$$

2.



$$(?) - (?) = (?)$$

3.



$$(?) + (?) = (?)$$